


Find the missing part.

8



You can **subtract** to find the **difference**.

8



8 minus  
5 is 3.




### Guided Practice

Draw the missing part.  
Then write a subtraction sentence.

1.


9



$$\underline{9} - \underline{5} = \underline{4}$$

2.


10



$$\underline{\quad} - \underline{\quad} = \underline{\quad}$$

3.

7



$$\underline{\quad} - \underline{\quad} = \underline{\quad}$$

4.

18



$$\underline{\quad} - \underline{\quad} = \underline{\quad}$$

**Do you understand?** How do you write a subtraction sentence?

From *enVisionMATH* Copyright © Pearson Education, Inc. or its affiliates. Used By Permission. All Rights Reserved.